






Name: \_\_\_\_\_

### Protein Math

Add the number of protein foods in each box. Write your answer on the line.

 $\begin{array}{c} \text{cow} + \text{cow} \\ \text{cow} \end{array} = \underline{\hspace{2cm}}$	 $\begin{array}{c} \text{chicken} + \text{chicken} \\ \text{chicken} \end{array} = \underline{\hspace{2cm}}$
 $\begin{array}{c} \text{fish} + \text{fish} \\ \text{fish} \end{array} = \underline{\hspace{2cm}}$	
 $\begin{array}{c} \text{pig} + \text{pig} \\ \text{pig} \end{array} = \underline{\hspace{2cm}}$	 $\text{leafy} + \text{leafy} = \underline{\hspace{2cm}}$

